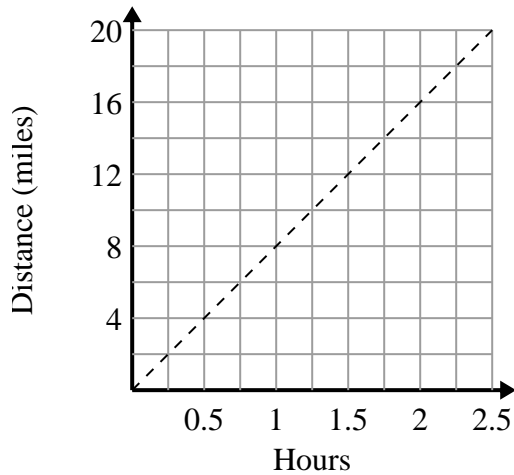




Determine which statements about the graph are true.

**Answers**

1)



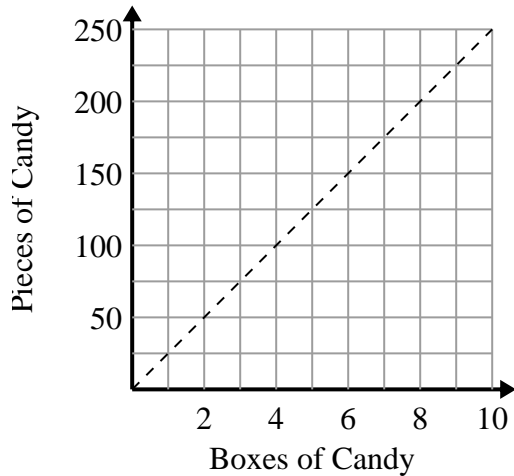
- A. The point (8 , 1) shows that it takes 1 hours to travel 8 miles.
- B. The point (0.75 , 6) shows that travelling 6 miles will take 0.75 hours.
- C. The point (14 , 1.75) shows that it takes 1.75 hours to travel 14 miles.
- D. The point (0.5 , 4) shows that it takes 0.5 hours to travel 4 miles.

1. \_\_\_\_\_

2. \_\_\_\_\_

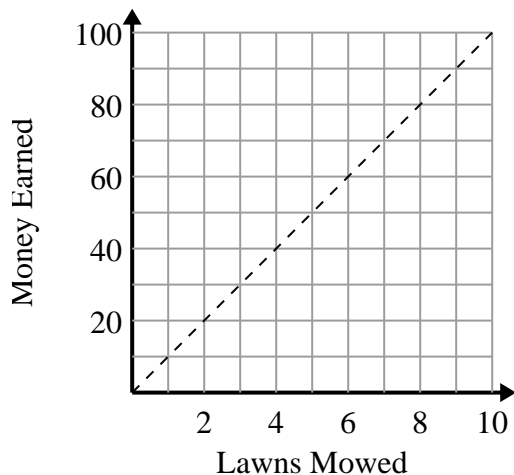
3. \_\_\_\_\_

2)



- A. The point (1 , 25) shows that 1 box of candy contain 25 pieces of candy.
- B. The point (4 , 100) shows that 4 boxes of candy contain 100 pieces of candy.
- C. The point (175 , 7) shows that you get 175 pieces of candy in 7 boxes.
- D. The point (3 , 75) shows that you get 75 pieces of candy in 3 boxes.

3)



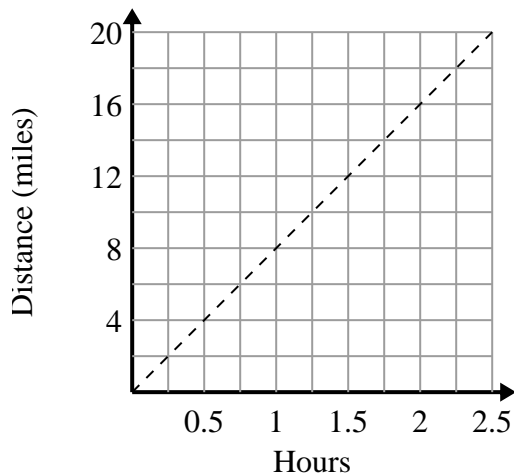
- A. The point (10 , 1) shows that you would earn \$10 for mowing 1 lawn.
- B. The point (40 , 4) shows that mowing 4 lawns will earn you \$40.
- C. The point (8 , 80) shows that you would earn \$80 for mowing 8 lawns.
- D. The point (3 , 30) shows that mowing 3 lawns will earn you \$30.



Determine which statements about the graph are true.

**Answers**

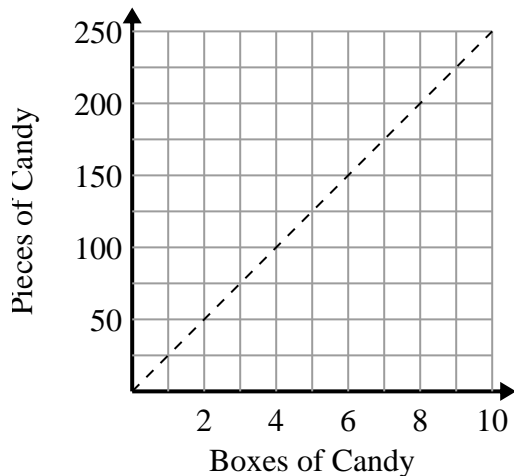
1)



- A. The point (8 , 1) shows that it takes 1 hours to travel 8 miles.
- B. The point (0.75 , 6) shows that travelling 6 miles will take 0.75 hours.
- C. The point (14 , 1.75) shows that it takes 1.75 hours to travel 14 miles.
- D. The point (0.5 , 4) shows that it takes 0.5 hours to travel 4 miles.

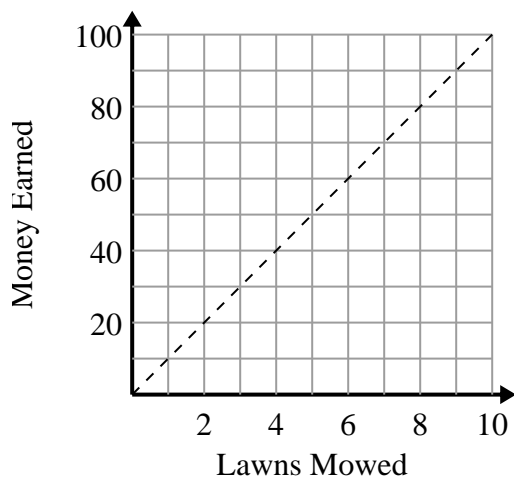
1. **B,D**2. **A,B,D**3. **C,D**

2)



- A. The point (1 , 25) shows that 1 box of candy contain 25 pieces of candy.
- B. The point (4 , 100) shows that 4 boxes of candy contain 100 pieces of candy.
- C. The point (175 , 7) shows that you get 175 pieces of candy in 7 boxes.
- D. The point (3 , 75) shows that you get 75 pieces of candy in 3 boxes.

3)



- A. The point (10 , 1) shows that you would earn \$10 for mowing 1 lawn.
- B. The point (40 , 4) shows that mowing 4 lawns will earn you \$40.
- C. The point (8 , 80) shows that you would earn \$80 for mowing 8 lawns.
- D. The point (3 , 30) shows that mowing 3 lawns will earn you \$30.